



የአንደኛ ክፍል ሂሳብ

ምዕራፍ 1 ክፍለ ትምህርት 6 መለማመጃ

የክፍለ ትምህርት አለማ ምሳሌዎች ልምምድ ሙከራ

<https://drnegaeducationcenter.org/>

የክፍለ ትምህርቱ አለማ

ከ 6 እስከ 9 ያሉትን ቁጥሮች ያወዳድራሉ።


<https://drnegaeducationcenter.org/>

ምሳሌ

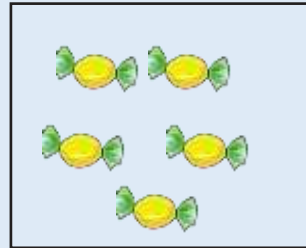


ምሳሌ 1:- ትልቁን ቁጥር ምረጡ። የቱ በቁጥር ይበልጣል?

(1)



ሀ




ለ

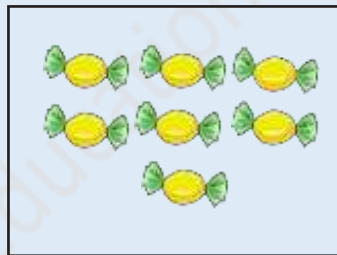
መልስ:- ሀ

ትንሹን ቁጥር ምረጡ። የቱ በቁጥር ይንሳል?

(2)



ሀ



ለ

መልስ:- ሀ

ቀጣይ ምሳሌ

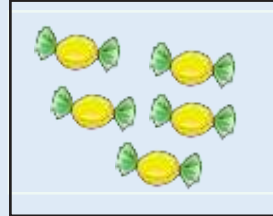


ምሳሌ 2:- ትልቁን ቁጥር ምረጡ። የቱ በቁጥር ይበልጣል?

(1)



ሀ

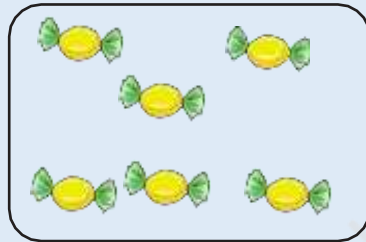


ለ


መልስ:- ሀ

ትንሹን ቁጥር ምረጡ። የቱ በቁጥር ያንሳል?

(2)



ሀ



ለ

መልስ:- ሀ

ልምምድ ለመጀመር ከታች ያለውን ሊንክ ይጫኑ።


[ጀምር](https://drnegaeducationcenter.org/)



ልምምድ 1.1

ትልቁን ቁጥር ምረጡ። የቱ በቁጥር ይበልጣል?

(1)




9

6

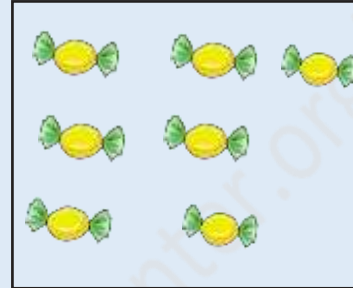


ትንሹን ቁጥር ምረጡ። የቱ በቁጥር ያንሳል?

(2)



፬




፮



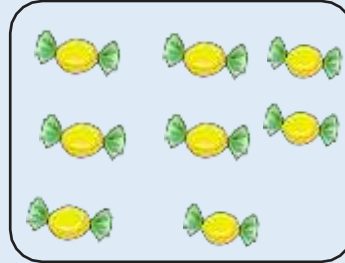
ልምምድ 1.2

ትልቁን ቁጥር ምረጡ። የቱ በቁጥር ይበልጣል?

(1)



5



10




ትንሹን ቁጥር ምረጡ። የቱ በቁጥር ያንሳል?

(2)



6



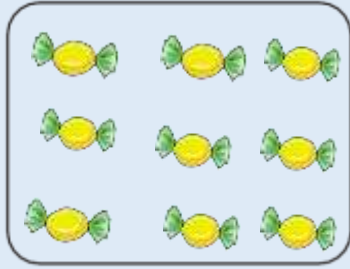
7




ልምምድ 1.3

ትልቁን ቁጥር ምረጡ። የቱ በቁጥር ይበልጣል?

(1)



ሀ




ለ

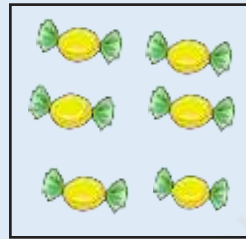


ትንሹን ቁጥር ምረጡ። የቱ በቁጥር ያንሳል?

(2)



ሀ




ለ




ልምምድ 1.4
ትልቁን ቁጥር ምረጡ። የቱ በቁጥር ይበልጣል?

(1)



U

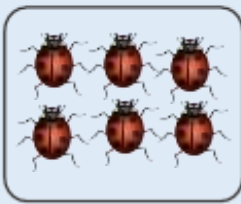


A




ትንሹን ቁጥር ምረጡ። የቱ በቁጥር ያንሳል?

(2)



ሀ





ለ



ልምምድ 1.5

ትልቁን ቁጥር ምረጡ። የቱ በቁጥር ይበልጣል?

(1)



U

A




ትንሹን ቁጥር ምረጡ። የቱ በቁጥር ያንሳል?

(2)



U





1



ልምምድ 1.6

ትልቁን ቁጥር ምረጡ። የቱ በቁጥር ይበልጣል?



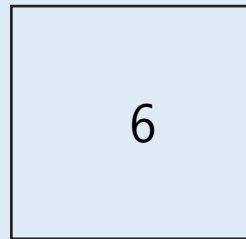

U

9



ትንሹን ቁጥር ምረጡ። የቱ በቁጥር ያንሳል?

(2)



U

6




ልምምድ 1.7

ትልቁን ቁጥር ምረጡ። የቱ በቁጥር ይበልጣል?

(1)



፲




፲

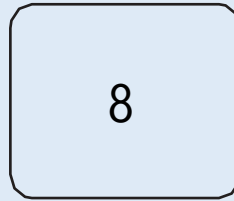


ትንሹን ቁጥር ምረጡ። የቱ በቁጥር ያንሳል?

(2)



U



8



ልምምድ 1.8

ትልቁን ቁጥር ምረጡ። የቱ በቁጥር ይበልጣል?

(1)



U




U



ትንሹን ቁጥር ምረጡ። የቱ በቁጥር ያንሳል?

(2)



U


9



ልምምድ 1.9

ትልቁን ቁጥር ምረጡ። የቱ በቁጥር ይበልጣል?

(1)



9





8



ትንሹን ቁጥር ምረጡ። የቱ በቁጥር ያንሳል?

(2)



ሀ


ለ



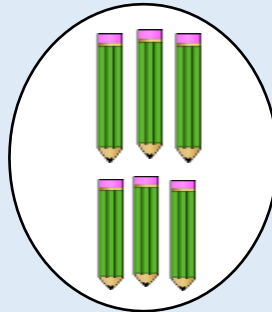
ልምምድ 1.10

ትልቁን ቁጥር ምረጡ። የቱ በቁጥር ይበልጣል?

(1)



U




A

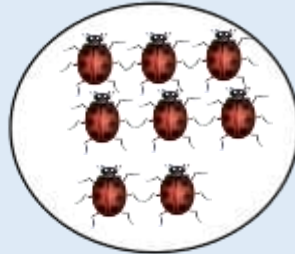


ትንሹን ቁጥር ምረጡ። የቱ በቁጥር ያንሳል?

(2)



U



A

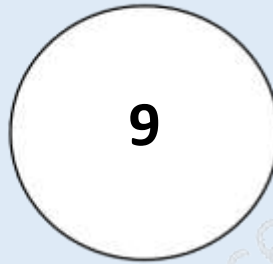
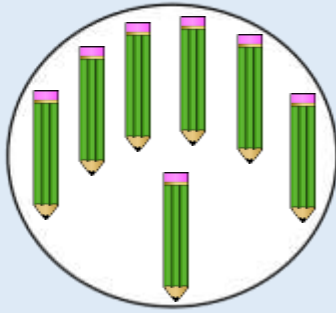
<https://drmegaeducationcenter.org/>



ልምምድ 1.11

ትልቁን ቁጥር ምረጡ። የቱ በቁጥር ይበልጣል?

(2)




U

9




ትንሹን ቁጥር ምረጡ። የቱ በቁጥር ያንሳል?

(2)



U



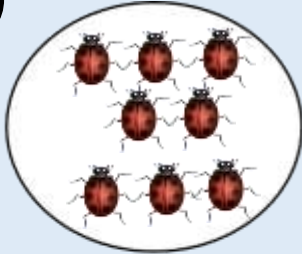
A



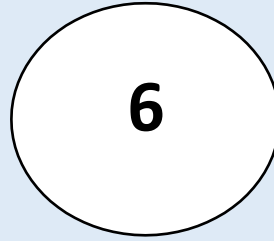
ልምምድ 1.12

ትልቁን ቁጥር ምረጡ። የቱ በቁጥር ይበልጣል?

(1)



9



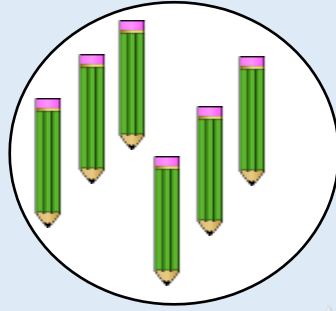
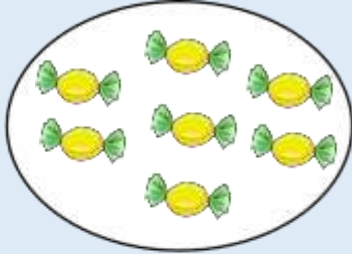
6

<https://drmegaeducationcenter.org/>



ትንሹን ቁጥር ምረጡ። የቱ በቁጥር ያንሳል?

(2)



U

Λ

<https://drmegaeducationcenter.org/>



በትክክል መልሰዋል። ወደ ቀጣይ ጥያቄ ይሂዱ።

<https://drmegaeducationcenter.org/>



በትክክል አልመለሱም። ይህ ምስል በቁጥር ያንሳል።
እንደገና ይሞክሩ።



<https://drnegaeducationcenter.org/>

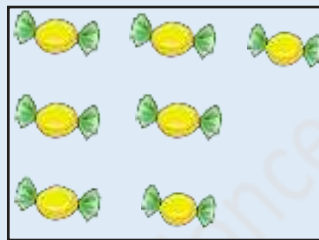


በትክክል መልሰዋል። ወደ ቀጣይ ጥያቄ ይሂዱ።

<https://drmegaeducationcenter.org/>



በትክክል አልመለሱም። ይህ ምስል
እንደገና ይሞክሩ።



በቁጥር ይበልጣል።




በትክክል መልሰዋል። ወደ ቀጣይ ጥያቄ ይሂዱ።

<https://drmegaeducationcenter.org/>



በትክክል አልመለሱም። ይህ ምስል
እንደገና ይሞክሩ።



በቁጥር ያንሳል።



በትክክል መልሰዋል። ወደ ቀጣይ ጥያቄ ይሂዱ።



በትክክል አልመለሱም። ይህ ምስል
እንደገና ይሞክሩ።



በቁጥር ይበልጣል።



በትክክል መልሰዋል። ወደ ቀጣይ ጥያቄ ይሂዱ።

<https://drmegaeducationcenter.org/>



በትክክል አልመለሱም። ይህ ምስል
እንደገና ይሞክሩ።



በቁጥር ያንሳል።

<https://drnegaeducationcenter.org/>



በትክክል መልሰዋል። ወደ ቀጣይ ጥያቄ ይሂዱ።

<https://drmegaeducationcenter.org/>



በትክክል አልመለሱም። ይህ ምስል
እንደገና ይሞክሩ።



በቁጥር ይበልጣል።



በትክክል መልሰዋል። ወደ ቀጣይ ጥያቄ ይሂዱ።

<https://drmegaeducationcenter.org/>



በትክክል አልመለሱም። ይህ ምስል
እንደገና ይሞክሩ።



በቁጥር ያንሳል።




በትክክል መልሰዋል። ወደ ቀጣይ ጥያቄ ይሂዱ።

<https://drmegaeducationcenter.org/>



በትክክል አልመለሱም። ይህ ምስል
እንደገና ይሞክሩ።



በቁጥር ይበልጣል።



በትክክል መልሰዋል። ወደ ቀጣይ ጥያቄ ይሂዱ።



በትክክል አልመለሱም። ይህ ምስል
እንደገና ይሞክሩ።




በቁጥር ያንሳል።



በትክክል መልሰዋል። ወደ ቀጣይ ጥያቄ ይሂዱ።



በትክክል አልመለሱም። ይህ ምስል
እንደገና ይሞክሩ።



በቁጥር ይበልጣል።



በትክክል መልሰዋል። ወደ ቀጣይ ጥያቄ ይሂዱ።



በትክክል አልመለሱም። ይህ ምስል
እንደገና ይሞክሩ።



በቁጥር ያንሳል።

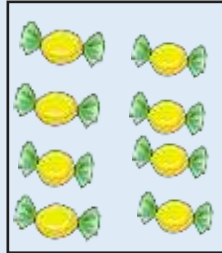


በትክክል መልሰዋል። ወደ ቀጣይ ጥያቄ ይሂዱ።

<https://drmegaeducationcenter.org/>



በትክክል አልመለሱም። ይህ ምስል
እንደገና ይሞክሩ።



በቁጥር ይበልጣል።



በትክክል መልሰዋል። ወደ ቀጣይ ጥያቄ ይሂዱ።

<https://drmegaeducationcenter.org/>



በትክክል አልመለሱም። ይህ ምስል
እንደገና ይሞክሩ።




በቁጥር ያንሳል።



በትክክል መልሰዋል። ወደ ቀጣይ ጥያቄ ይሂዱ።



በትክክል አልመለሱም። ይህ ምስል
በቁጥር ይበልጣል።




እንደገና ይሞክሩ።



በትክክል መልሰዋል። ወደ ቀጣይ ጥያቄ ይሂዱ።



በትክክል አልመለሱም። ይህ ምስል
እንደገና ይሞክሩ።



በቁጥር ያንሳል።



በትክክል መልሰዋል። ወደ ቀጣይ ጥያቄ ይሂዱ።



በትክክል አልመለሱም። ይህ ምስል
እንደገና ይሞክሩ።

9

በቁጥር ይበልጣል።

<https://drnegaeducationcenter.org/>



በትክክል መልሰዋል። ወደ ቀጣይ ጥያቄ ይሂዱ።



በትክክል አልመለሱም። ይህ ምስል
እንደገና ይሞክሩ።

8

በቁጥር ያንሳል።

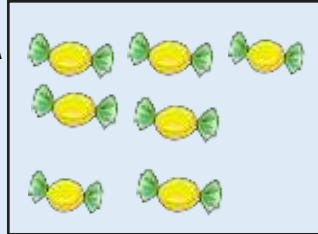


በትክክል መልሰዋል። ወደ ቀጣይ ጥያቄ ይሂዱ።

<https://drmegaeducationcenter.org/>



በትክክል አልመለሱም። ይህ ምስል
እንደገና ይሞክሩ።



በቁጥር ይበልጣል።

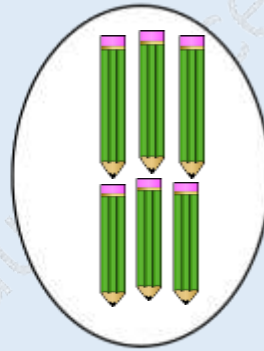
<https://drmegaeducationcenter.org/>



በትክክል መልሰዋል። ወደ ቀጣይ ጥያቄ ይሂዱ።



በትክክል አልመለሱም። ይህ ምስል
ያንሳል። እንደገና ይሞክሩ።



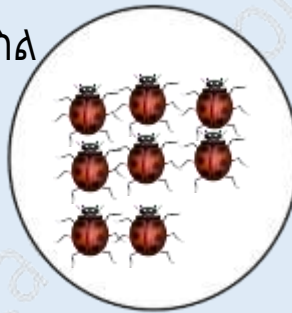
በቁጥር



በትክክል መልሰዋል። ወደ ቀጣይ ጥያቄ ይሂዱ።



በትክክል አልመለሱም። ይህ ምስል
እንደገና ይሞክሩ።



በቁጥር ይበልጣል።

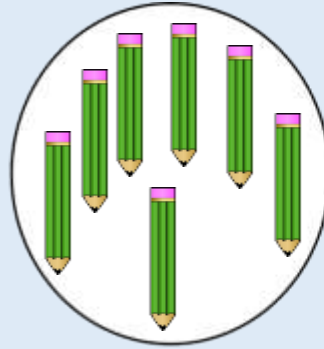


በትክክል መልሰዋል። ወደ ቀጣይ ጥያቄ ይሂዱ።

<https://drmegaeducationcenter.org/>



በትክክል አልመለሱም። ይህ ምስል
እንደገና ይሞክሩ።



በቁጥር ያንሳል።


<https://drmegaeducationcenter.org/>



በትክክል መልሰዋል። ወደ ቀጣይ ጥያቄ ይሂዱ።



በትክክል አልመለሱም። ይህ ምስል
እንደገና ይሞክሩ።



በቁጥር ይበልጣል።


<https://drnegaeducationcenter.org/>



በትክክል መልሰዋል። ወደ ቀጣይ ጥያቄ ይሂዱ።



በትክክል አልመለሱም። ይህ ምስል
እንደገና ይሞክሩ።



በቁጥር ያንሳል።

<https://drnegaeducationcenter.org/>

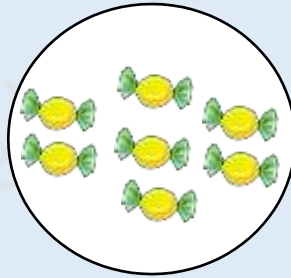


በትክክል መልሰዋል። ክፋለ ትምህርት ስድስትን በሚገባ አጠናቀዋል። ወደ ቀጣዩ ክፍለ ትምህርት ይልፉ።

<https://drnegaeducationcenter.org/>



በትክክል አልመለሱም። ይህ ምስል
እንደገና ይሞክሩ።



በቁጥር ይበልጣል።

